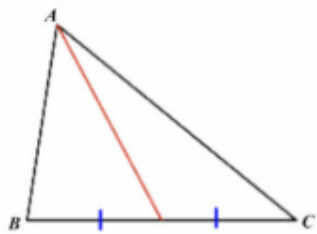


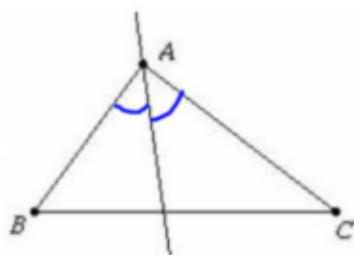
Geometry #5: Special Segments in Triangles
Big Idea

	Through Vertex	Through Midpoint	Forms right Angle	Draw A Picture
Median	Yes / No	Yes / No	Yes / No	
Altitude	Yes / No	Yes / No	Yes / No	
Angle Bisector	Yes / No	Yes / No	Yes / No	
Perpendicular Bisector	Yes / No	Yes / No	Yes / No	

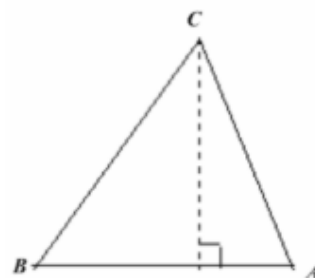
Based on the markings each triangle shown, identify the special segment by its appropriate name, then write that name in the blank below the diagram.



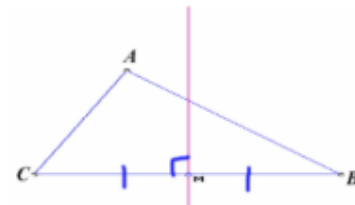
A. _____



B. _____



C. _____



D. _____